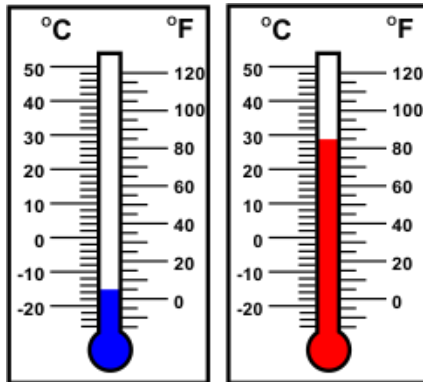
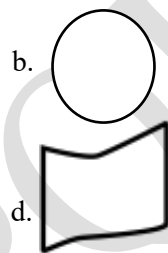
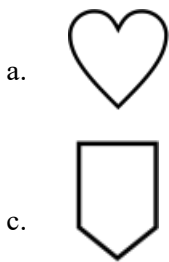




5. What is the sum of the temperatures shown in the thermometers?



- a. 17°C  
b. 110° F  
c. 41°C  
d. 90°F
6. Which of the following figures is made of straight lines only?



7. Which of these is same as  $3945 - 1540$ ?

- a.  $1780 + 1345$   
b.  $1250 + 1155$   
c.  $2790 - 255$   
d.  $3780 - 1275$

8. Seil has 137 marbles with him. He gives 28 and 29 marbles to Reh and Roh, respectively. How many marbles will be left with Seil?

- a. 80  
b. 97  
c. 127  
d. 194

9. Diana drew a set of squares and coloured a few squares. What fraction of the figure is unshaded?



- a.  $\frac{1}{5}$   
b.  $\frac{2}{5}$   
c.  $\frac{3}{5}$   
d.  $\frac{2}{3}$
10. A dozen bananas are stored in a sack and cost 12 cents each. Determine the total cost of bananas in the sack.
- a. 144 cents  
b. 336 cents  
c. 3,260 cents  
d. 4,032 cents







**GG RS LEARNING HUB PVT. LTD.**

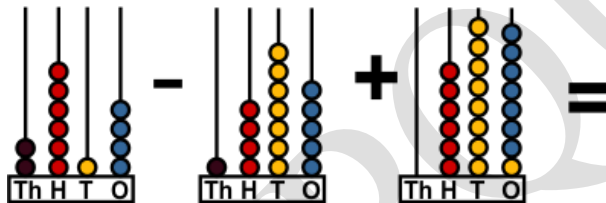
**32.** Roselina went to the shopping mall in an autorickshaw which is at a distance of 7 km 498 m from her home. On the way back, she had to walk for a distance of 1 km 128 m as there was no autorickshaw available. Then she boarded an auto-rickshaw and returned home. How much distance did she travel in the autorickshaw on her way back?

- a. 13 km 968 m
- b. 6 km 370 m
- c. 14 km 996 m
- d. 6 km 770 m

**33.** Roger is a businessman. He invested in different firms. He invested \$3000 in edutech firm, \$2789 in marketing, \$3675 in IT firm and \$873 in Non IT firm. In which firm does he invested more?

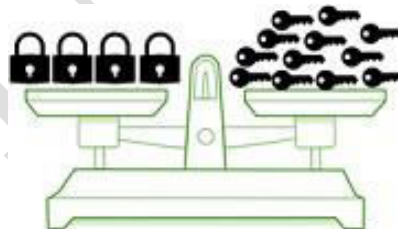
- a. Marketing
- b. Edutech
- c. NON IT
- d. IT

**34.** Solve:



- a. 1,401
- b. 1,936
- c. 1,826
- d. 2,435

**35.** Using the given figure, find the weight of each lock if the weight of 3 keys is 1 kg:



- a. 12 kg
- b. 1 kg
- c. 4 kg
- d. 3 kg